

WALT locate countries and major cities around the world.

I know the world is made up of continents of countries and within those countries are major cities.
 I can name countries and major cities in the world.
 I can accurately locate countries and major cities in the world

Information

Africa

Africa Fact File

Total Population
1.216 billion


Number of Countries
54

Longest River
Nile (Egypt)

Highest Point
Kilimanjaro (Tanzania)

Largest Lake
Lake Victoria (Kenya)

Largest Desert
Sahara



1. Senegal
2. Guinea-Bissau
3. Sierra Leone
4. Liberia
5. Cote d'Ivoire
6. Ghana
7. Togo
8. Rep. of the Congo
9. Lesotho
10. Eswatini
11. Malawi
12. Uganda
13. Rwanda
14. Burundi
15. The Gambia

Antarctica

Antarctica Fact File


Total Population
No permanent residents and never has there been a native population

Number of Countries
No individual groups of countries

Largest Ice Shelf
Ross Ice Shelf

Area
5,339,543 miles

Highest Point
Mt. Vinson



Asia



1. Lebanon
2. Israel
3. Jordan
4. Kuwait
5. U.A.E
6. Cambodia
7. Malaysia
8. Singapore

Asia Fact File

Total Population
4.5 billion

Number of Countries
48

Longest River
Yangtze River (China)

Highest Point
Mount Everest (China/Nepal)

Largest Sea
Caspian Sea

Largest Desert
Gobi (Mongolia)

Russia spans across both Asia and Europe



Australasia/Oceania



Australasia/Oceania Fact File

Total Population
38.8 million


Number of Countries
14

Longest River
Murray River (Australia)

Highest Point
Mount Cook (New Zealand)

Largest Lake
Eyre (Australia)

Largest Desert
Great Victoria Desert (Australia)



Europe

1. Netherlands
2. Belgium
3. Luxembourg
4. Andorra
5. Switzerland
6. Czech Republic
7. Austria
8. Slovakia
9. Slovenia
10. Hungary
11. Croatia
12. Bosnia
13. Serbia
14. Montenegro
15. Macedonia
16. Albania
17. Moldova
18. Azerbaijan
19. Armenia
20. Georgia
21. Kosovo
22. Cyprus

Europe Fact File

Total Population
741.4 million

Number of Countries
50

Largest Country
Population
Russia

Longest River
Volga (Russia)

Highest Point
Elbrus, Caucasus Mountains (Russia)

Largest Lake
Ladoga (Russia)

Russia spans across both Asia and Europe

North America

1. Belize
2. Guatemala
3. Honduras
4. Costa Rica
5. Panama
6. Cuba
7. Jamaica
8. Haiti
9. El Salvador
10. Dominican Republic

North America Fact File

Total Population
579 million

Longest River
Mississippi - Missouri

Highest Point
Mt McKinley (Denali), Alaska

Largest Lake
Lake Superior, Canada

Largest Desert
Great Basin

South America

South America Fact File

Total Population
422.5 million

Number of Countries
12

Longest River
Amazon

Highest Point
Cerro Aconcagua (Argentina)

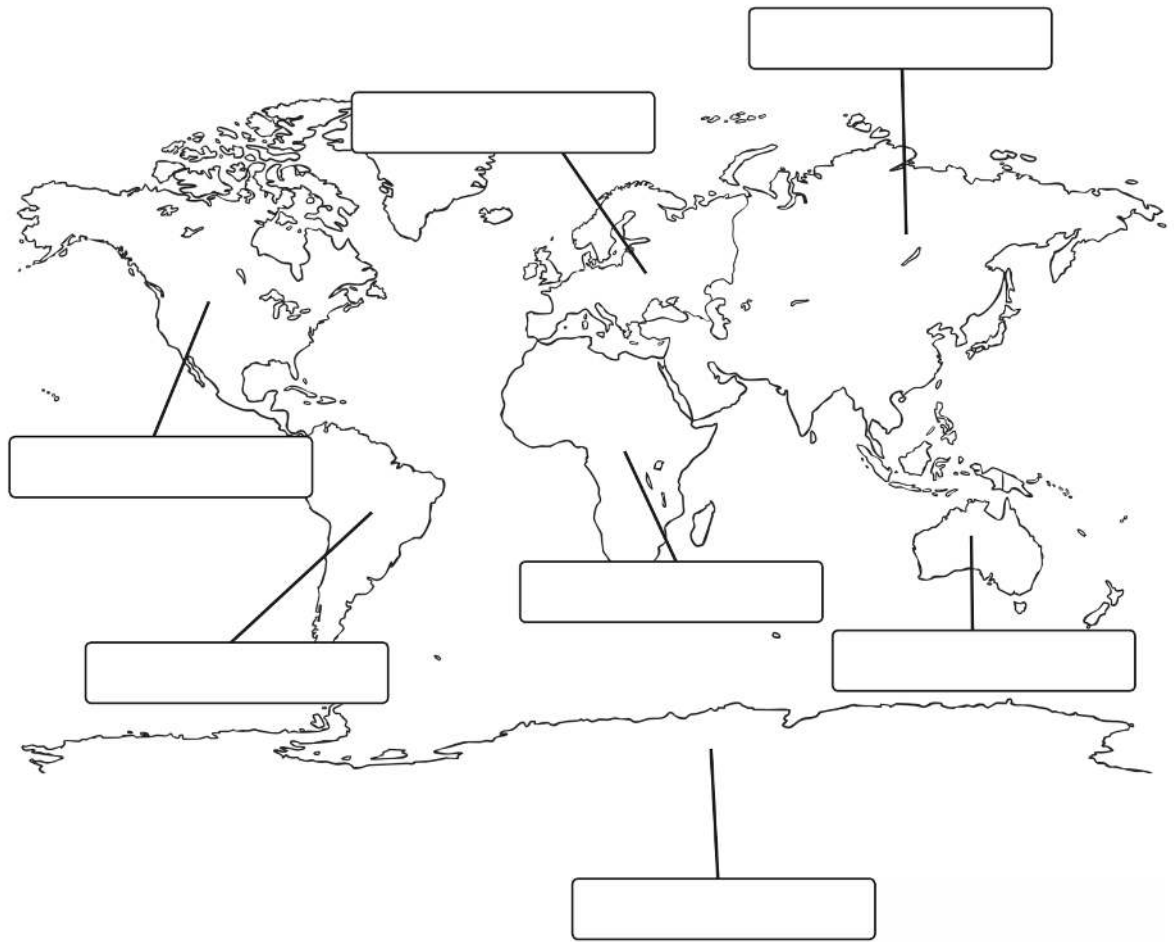
Largest Lake
Lake Titicaca (Bolivia)

Largest Desert
Atacama Desert (Chile)

1. Guyana
2. Suriname
3. French Guiana
4. Chile

1 Star	2 Star	3 Star
<p>Task 1 Label the continents.</p> <p>Task 2 List 1 country for each continent</p>	<p>Task 1 Label the continents and list 5 countries in each continent.</p> <p>Task 2 Locate and label the countries on the map List the capital cities for each of the countries you have listed</p>	<p>Task 1 Label the continents. List 5 countries in each continent and their capital cities</p> <p>Task 2 Locate and label the countries and capital cities on the map</p>
		<p>Greater Depth Answer the questions provided</p>

Task 1



1 star

Continent	Country
Europe	
Asia	
Australasia/Oceania	
North America	
South America	
Africa	

2 Star

Asia

Europe

Australasia/Oceania

South America

North America

Africa

3 Star

Continent:	
Country	Capital City

Continent:	
Country	Capital City

Continent:	
Country	Capital City

Continent:	
Country	Capital City

Continent:	
Country	Capital City

Continent:	
Country	Capital City

Greater Depth

You will need to do your own research to answer some of these.

a) How many continents are there?

b) Write the names of the continents in alphabetical order.

c) Name the largest continent.

d) Name the smallest continent.

e) Which continent is the most populated?

f) Which continent is the least populated?

g) Which continent has the highest mountain? Name the mountain.

h) Which continent has the longest river? Name the river.

i) How many continents are connected to each other?

j) How many continents are not connected to other continents?

ANSWERS



And in information provided above

Capital city info:

[List of World Capitals with Countries Name Updated 2021 \(flagsworld.org\)](https://www.flagsworld.org/)

Greater Depth

a) How many continents are there?

There are seven continents.

b) Write the names of the continents in alphabetical order.

Africa, Antarctica, Asia, Australasia/Oceania, Europe, North America and South America.

c) Name the largest continent.

Asia is the largest continent.

d) Name the smallest continent.

Australasia/Oceania is the smallest continent.

e) Which continent is the most populated?

Asia is the most populated continent.

f) Which continent is the least populated?

Antarctica is the least populated continent.

g) Which continent has the highest mountain? Name the mountain.

Mount Everest is the highest mountain and it is found in Asia.

h) Which continent has the longest river? Name the river.

The Nile is the longest river and is found in Africa.

i) How many continents are connected to each other?

Six are connected to each other.

j) How many continents are not connected to other continents?

One is not connected to another.

