

Hand Out

Name

Date

1.

2.

37 60

3.

9 4 6 4



4.

5.

6.

p

99p 18p

7.

20 36

8.

p

10% £1.50

9.

days

10.

8 12

11.

16cm 4cm

12.

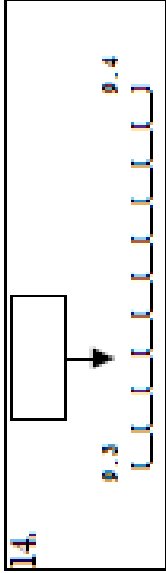
200cm 300cm 247cm
256cm 25mm

13.

p

16p 4

14.



15.

40 50

16.

boys

124 girls

17.

miles

110 3

18.

7.8 19.2 7.93
12.6 15.83

19.

minutes

Starts 11:20
Ends 11:45

20.

730 1000

5 second response

Question 1

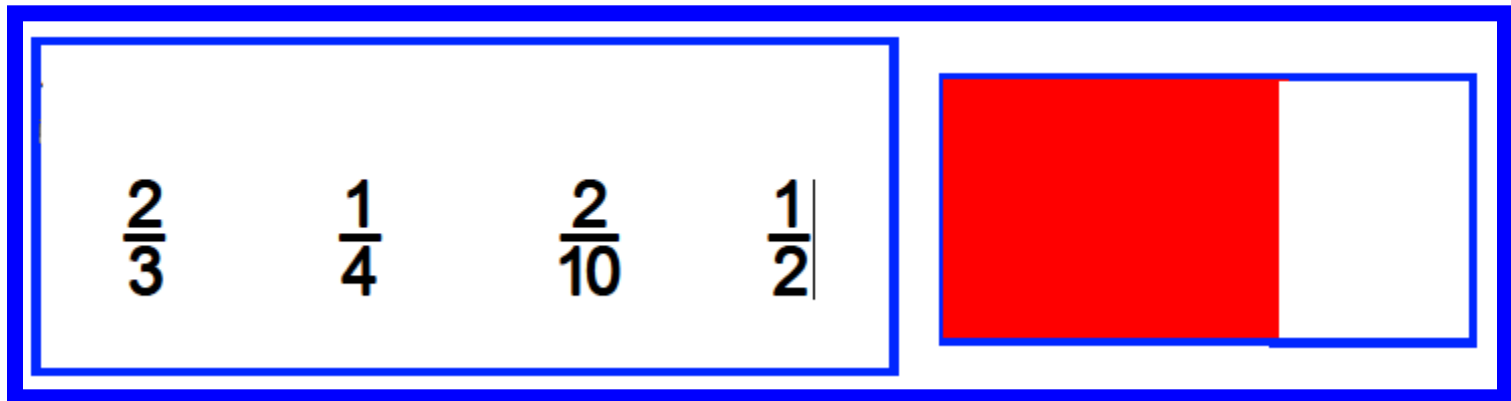
What is half of 90?

Question 2

What is 37 more than
60?

Question 3

Look at the rectangle on your answer sheet. Put a ring around the fraction of the rectangle which is shaded.



Question 4

Write the number
nineteen thousand and
fifty eight in figures.

Question 5

What is half of 8.2?

10 second response

Question 6

A melon costs 99p and
an orange costs 18p.
How much more does
the melon cost than the
orange?

Question 7

Two numbers have a difference of twenty. One of the numbers is 36.

What could the other number be?

Question 8

What is 10% of £1.50?

Question 9

How many days are
there in 8 weeks?

Question 10

What is the product of 8
and 12?

Question 11

What is the perimeter
of a rectangle which
measures 16cm long
and 4cm wide?

Question 12

Put a ring around the nearest length to two and a half metres

200cm

300cm

247cm

256cm

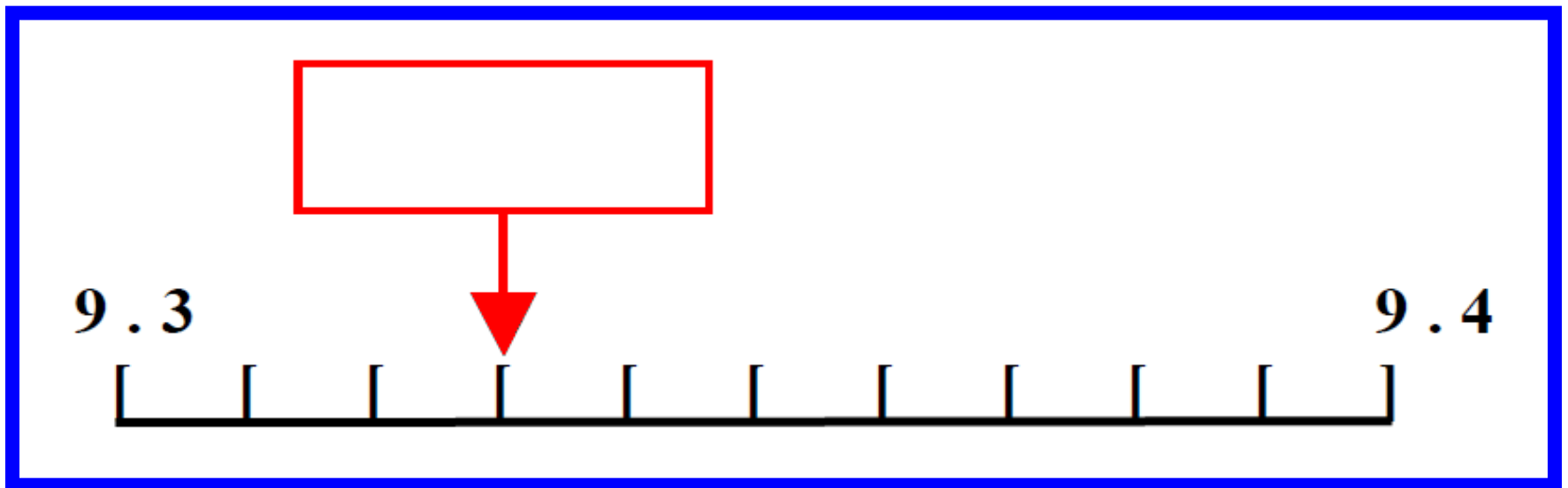
25mm

Question 13

Apples cost 16p. How much would four cost?

Question 14

On your answer sheet is a scale. What is the number shown by the arrow?



Question 15

What is 40 multiplied
by 50?

15 second response

Question 16

A school has exactly twice as many boys as girls. There are 124 girls. How many boys are there?

Question 17

A train travels at 110 miles per hour. How far will it travel in three hours?

Question 18

Put a ring around the smallest of the five numbers on your answer sheet.

7.8

19.2

7.93

12.6

15.83

Question 19

A television programme starts at 11:20 and ends at 11:45. How long was the programme?

Question 20

Which number would I
add to 730 to make
1000?

5 Second Answers

1. What is half of 90? **(45)**
2. What is 37 more than 60? **(97)**
3. Look at the rectangle on your answer sheet.
Put a ring around the fraction of the rectangle
which is shaded. **(2/3)**
4. Write the number nineteen thousand and fifty
eight in figures **(19,058)**
5. What is half of 8.2? **(4.1)**

10 Second Answers

6. A melon costs 99p and an orange costs 18p. How much more does the melon cost than the orange? **(81p)**
7. Two numbers have a difference of twenty. One of the numbers is 36. What could the other number be? **(16 or 56)**
8. What is 10% of £1.50? **(15p)**
9. How many days are there in 8 weeks? **(56 days)**
10. What is the product of 8 and 12? **(96)**
11. What is the perimeter of a rectangle which measures 16cm long and 4cm wide? **(40cm)**
12. Put a ring around the nearest length to two and a half metres **(247cm)**
13. Apples cost 16p. How much would four cost? **(64p)**
14. On your answer sheet is a scale. What is the number shown by the arrow? **(9.33)**
15. What is 40 multiplied by 50? **(2000)**

15 Second Answers

16. A school has exactly twice as many boys as girls. There are 124 girls. How many boys are there? **(248)**
17. A train travels at 110 miles per hour. How far will it travel in three hours? **(330 miles)**
18. Put a ring around the smallest of the five numbers on your answer sheet. **(7.8)**
19. A television programme starts at 11:20 and ends at 11:45. How long was the programme? **(25 mins)**
20. Which number would I add to 730 to make 1000? **(270)**